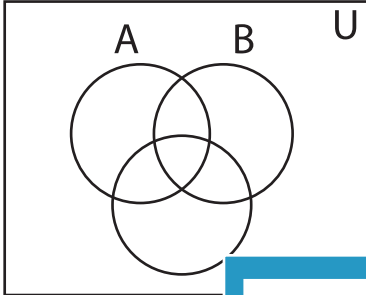


Shading - Venn Diagram

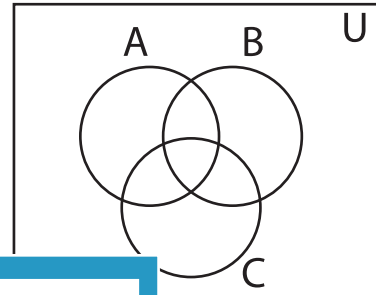
L3S3

Shade the given region.

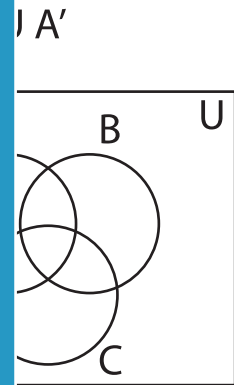
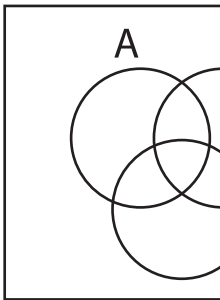
1) $(A \cup B)' \cap (C' - A)'$



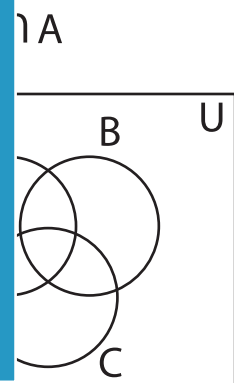
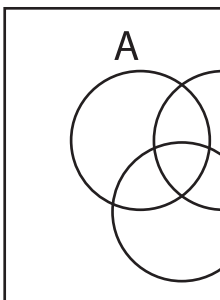
2) $(A - C)' - C'$



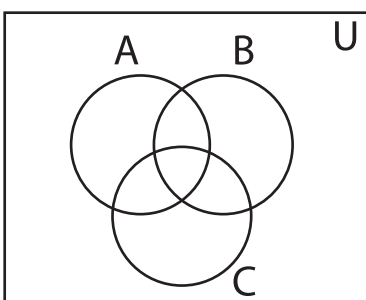
3) $(A' - C') - B'$



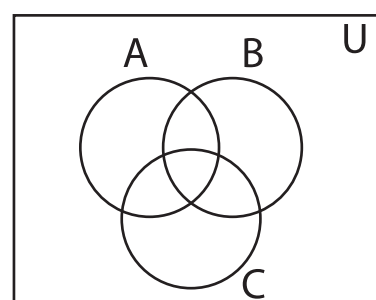
5) $C \cup (A \cap C)$



7) $(B - A) \cup (C - B)$



8) $(A - B)' - (B - A)$



PREVIEW

Gain complete access to the largest
collection of worksheets in all subjects!

Members, please
log in to
download this
worksheet.

Not a member?
Please sign up to
gain complete
access.

www.mathworksheets4kids.com