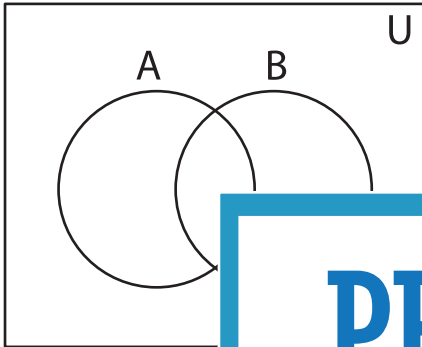


Shading - Venn Diagram

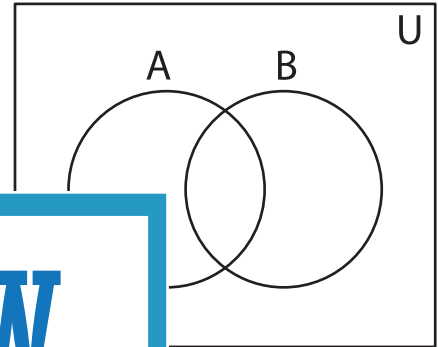
L1S3

Shade the given region.

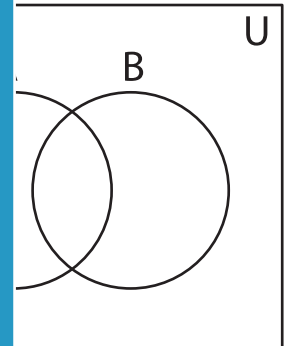
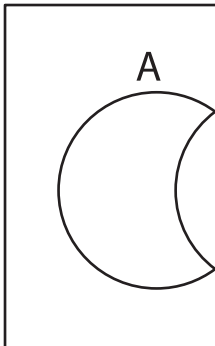
1) $(A \cup B)'$



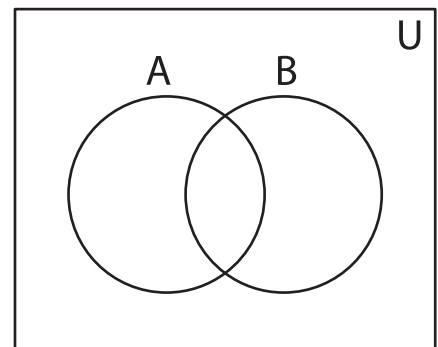
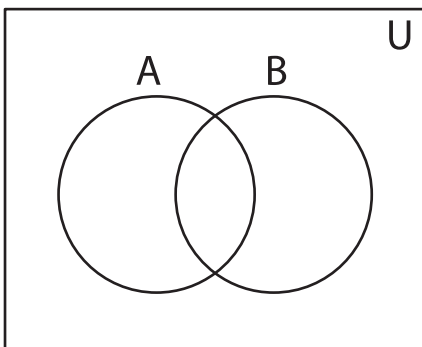
2) $(A' \cap B)'$



3) B'



5) $A \cap B$



PREVIEW

Gain complete access to the largest
collection of worksheets in all subjects!

Members, please
log in to
download this
worksheet.

Not a member?
Please sign up to
gain complete
access.

www.mathworksheets4kids.com