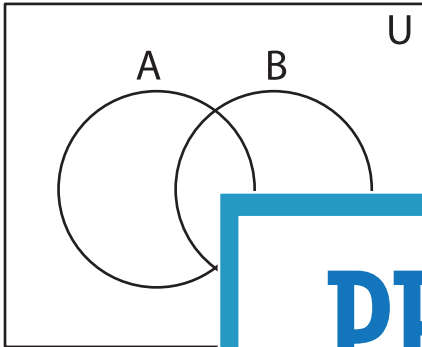


Shading - Venn Diagram

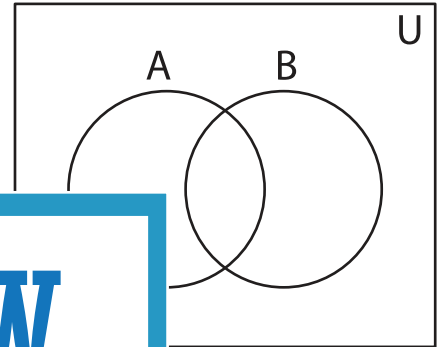
L2S4

Shade the given region.

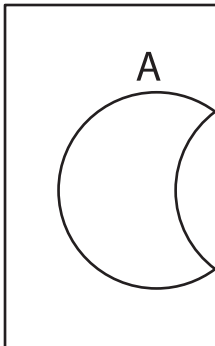
1) $(B')' - A'$



2) $(A - B)'$



3) $A \cap B'$



PREVIEW
Gain complete access to the largest
collection of worksheets in all subjects!

Members, please
log in to
download this
worksheet.

Not a member?
Please sign up to
gain complete
access.

www.mathworksheets4kids.com

5) $(B' - A)'$

