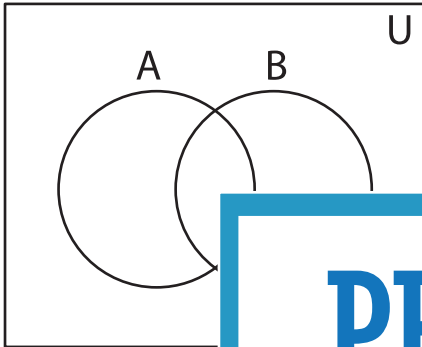


Shading - Venn Diagram

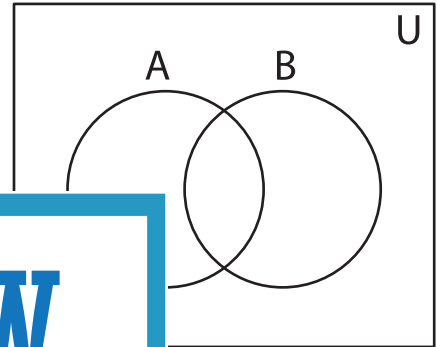
L3S1

Shade the given region.

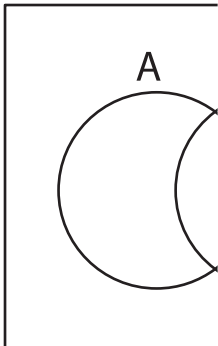
1) $A \cup (A \cap B)$



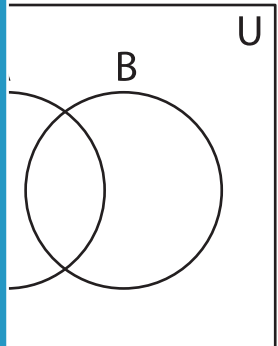
2) $(B' \cup A) - (B \cap A)$



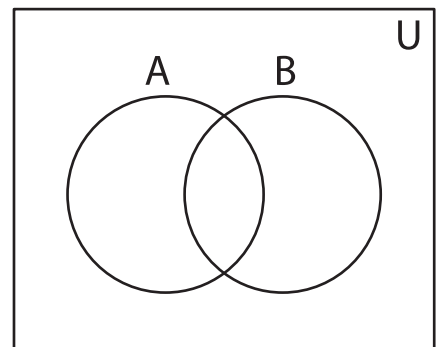
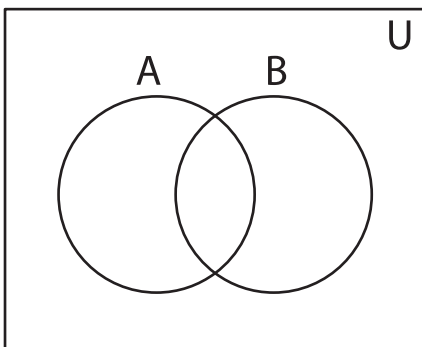
3) $(B - A) \cap (A' \cap B)$



4) $(A - B')$



5) $(A \cap B)' \cup (A' \cap B)$



PREVIEW

Gain complete access to the largest collection of worksheets in all subjects!

Members, please log in to download this worksheet.

Not a member? Please sign up to gain complete access.

www.mathworksheets4kids.com