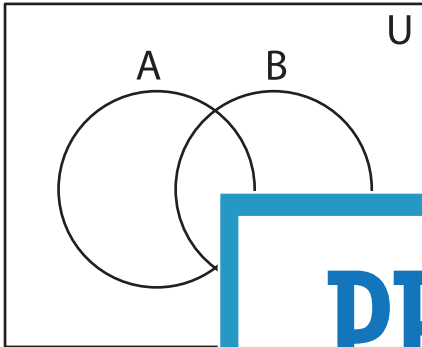


Shading - Venn Diagram

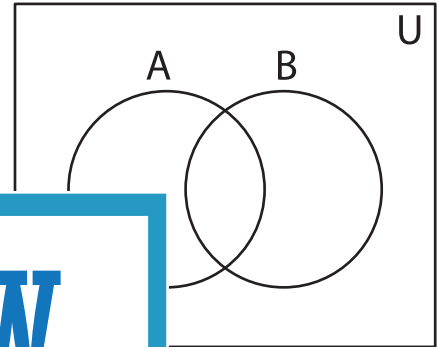
L3S3

Shade the given region.

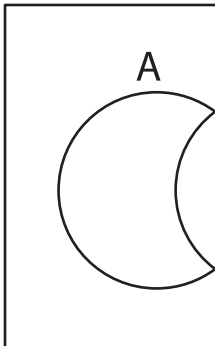
1) $(A' \cup B') - (B' - A)$



2) $(B - A') \cup (B - A)$



3) $(A \cup A') \cap (A' \cup B)$



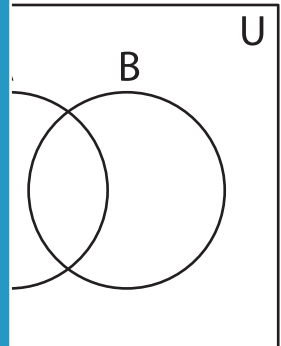
Gain complete access to the largest
collection of worksheets in all subjects!

Members, please
log in to
download this
worksheet.

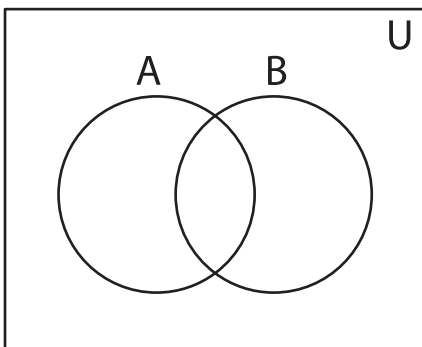
Not a member?
Please sign up to
gain complete
access.

www.mathworksheets4kids.com

4) $(A \cap B)'$



5) $(B' \cup A') \cap B'$



6) $(A \cap B)$

