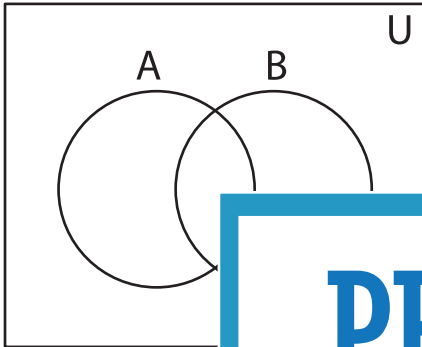


Shading - Venn Diagram

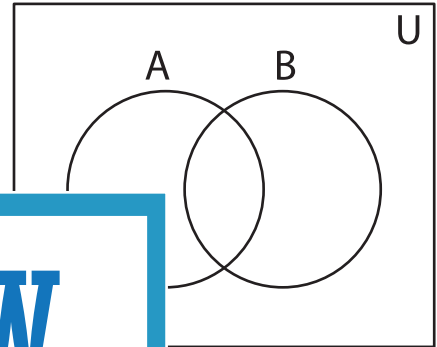
L3S4

Shade the given region.

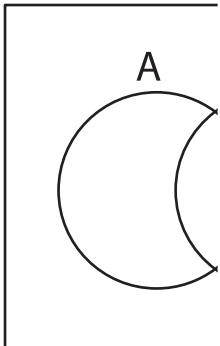
1) $(A \cap B)' \cap (B \cup B')$



2) $(B - A)' - (A' - B)$



3) $(A' \cap B') \cup (B \cap (A' \cap B'))$



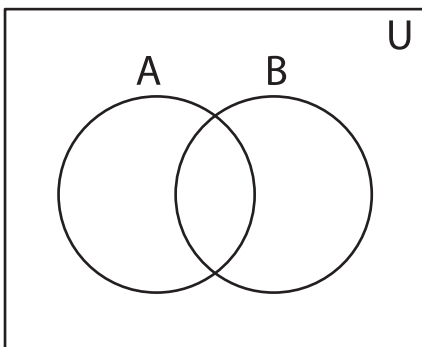
Gain complete access to the largest
collection of worksheets in all subjects!

Members, please
log in to
download this
worksheet.

Not a member?
Please sign up to
gain complete
access.

www.mathworksheets4kids.com

5) $(A \cup A') - (A \cap B)$



6) $(A' \cup B)$

