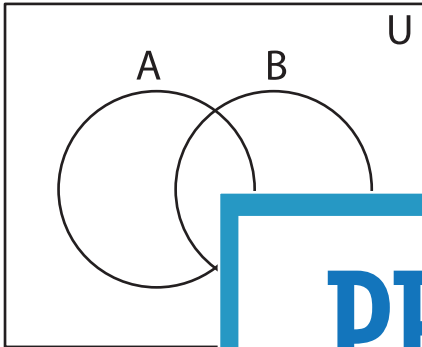


Shading - Venn Diagram

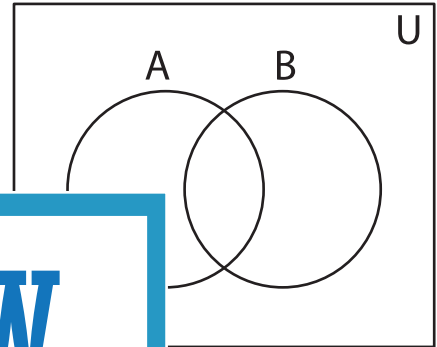
L3S5

Shade the given region.

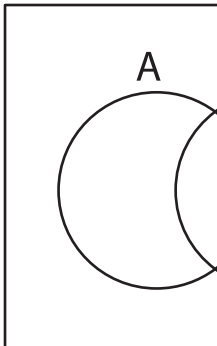
1) $(A' \cap B)' \cup (A' \cap B)$



2) $(A \cup B) \cap (A \cup B)'$



3) $(A' - B')' - (A \cap B)$



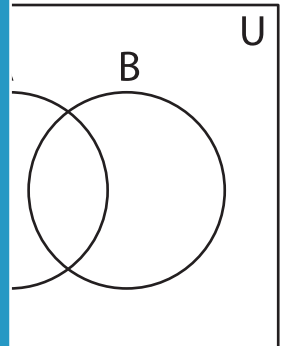
Gain complete access to the largest
collection of worksheets in all subjects!

Members, please
log in to
download this
worksheet.

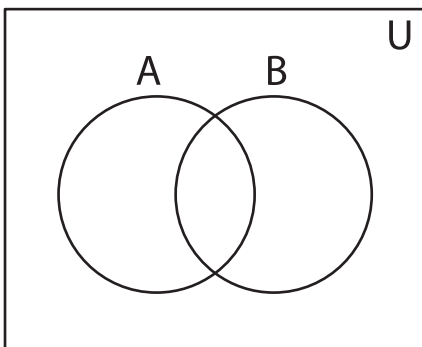
Not a member?
Please sign up to
gain complete
access.

www.mathworksheets4kids.com

$(A \cap B)'$



5) $(A \cap B) \cup (A - B)$



$(A - B)$

