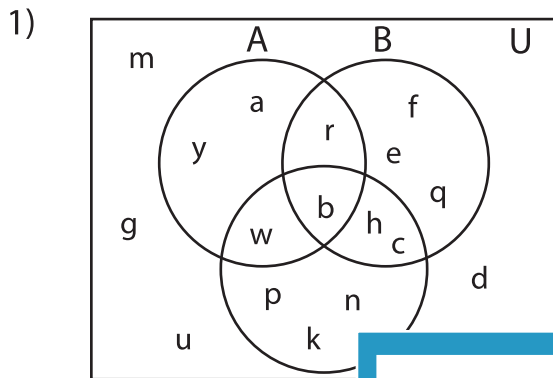


Venn Diagram

L1S2

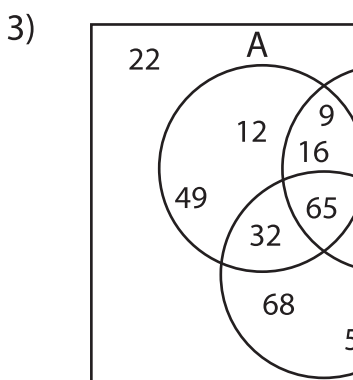
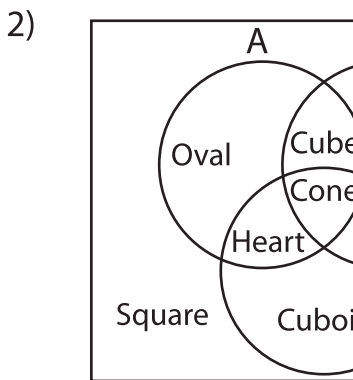
Perform the below mention boolean algebraic operation for the given set of elements.



i) $B' \cap C =$ _____

ii) $(A \cup C)' =$ _____

iii) $A' \cup B' =$ _____



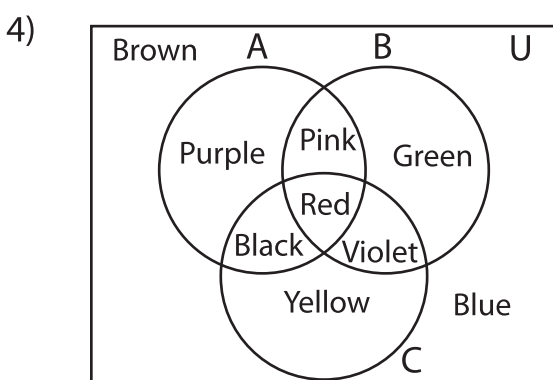
PREVIEW

Gain complete access to the largest collection of worksheets in all subjects!

Members, please log in to download this worksheet.

Not a member? Please sign up to gain complete access.

www.mathworksheets4kids.com



i) $(A \cup B)'\prime =$ _____

ii) $C =$ _____

iii) $B \cap C' =$ _____