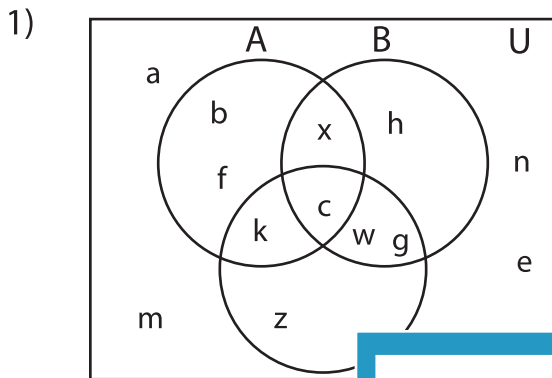


Venn Diagram

L2S3

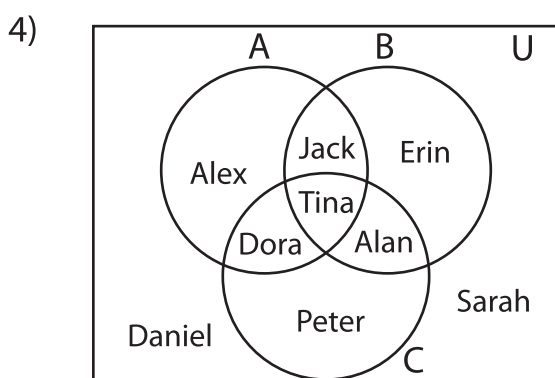
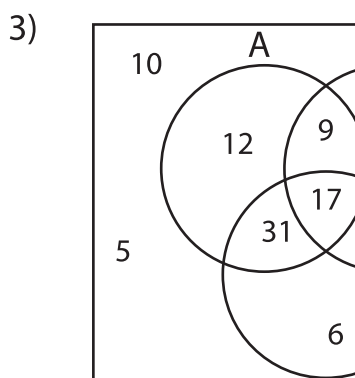
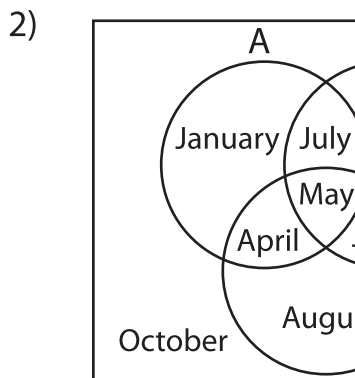
Perform the below mention boolean algebraic operation for the given set of elements.



i) $C' - A'$ = _____

ii) $(B \cup C)'$ = _____

iii) $A' - B$ = _____



i) $A - C$ = _____

ii) $C' - B$ = _____

iii) $(B - C)'$ = _____

PREVIEW

Gain complete access to the largest collection of worksheets in all subjects!

Members, please log in to download this worksheet.

Not a member? Please sign up to gain complete access.

www.mathworksheets4kids.com