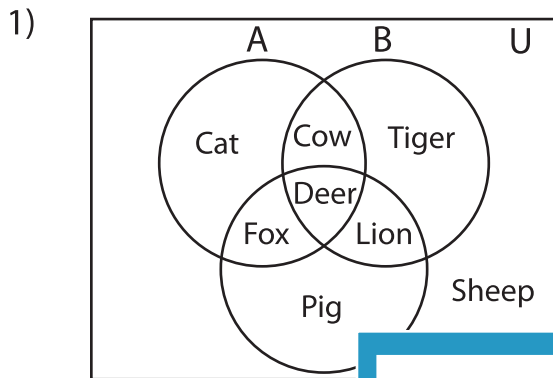


**Venn Diagram**

L2S4

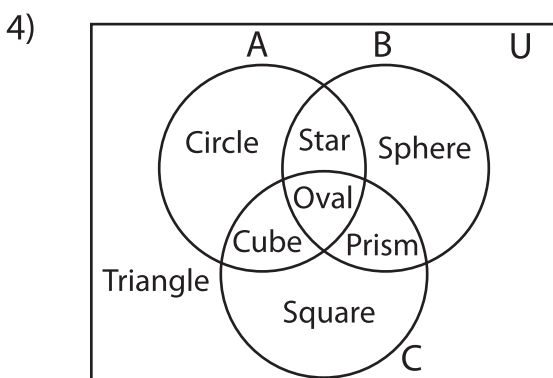
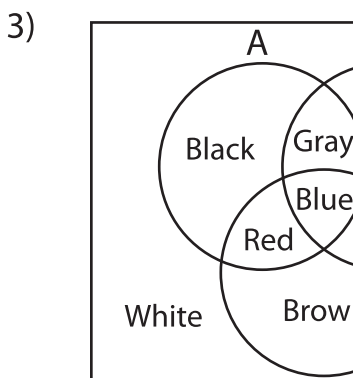
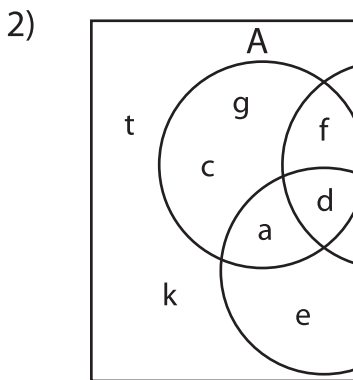
Perform the below mention boolean algebraic operation for the given set of elements.



i)  $A - C =$  \_\_\_\_\_

ii)  $A' - B' =$  \_\_\_\_\_

iii)  $(A \cap C)' =$  \_\_\_\_\_



i)  $(B' - A)' =$  \_\_\_\_\_

ii)  $(C' - B)' =$  \_\_\_\_\_

iii)  $A \cap C' =$  \_\_\_\_\_

**PREVIEW**

Gain complete access to the largest collection of worksheets in all subjects!

Members, please log in to download this worksheet.

Not a member? Please sign up to gain complete access.

[www.mathworksheets4kids.com](http://www.mathworksheets4kids.com)