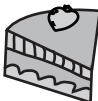




Weight Estimation - Customary Units




Sheet 1

Choose the object close to the given weight.




1) 25 ounces

- 
- 
- 



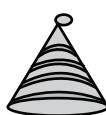
2) 1 ounce

- 
- 
- 




3) 5 pounds

- 
- 
- 




5) 2 ounces

- 
- 
- 

7) 15 ounces

- 
- 
- 

8) 10 pounds

- 
- 
- 

PREVIEW

Gain complete access to the largest
collection of worksheets in all subjects!

Members, please
log in to
download this
worksheet.




Not a member?
Please sign up to
gain complete
access.

www.mathworksheets4kids.com




Weight Estimation - Customary Units

Choose the object close to the given weight.

1) 25 ounces

- 
- 
- 



2) 1 ounce

- 
- 
- 




3) 5 pounds

- 
- 
- 




5) 2 ounces

- 
- 
- 

7) 15 ounces

- 
- 
- 

8) 10 pounds

- 
- 
- 

PREVIEW

Gain complete access to the largest
collection of worksheets in all subjects!

Members, please
log in to
download this
worksheet.

Not a member?
Please sign up to
gain complete
access.

www.mathworksheets4kids.com