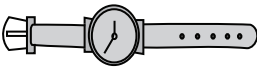




Weight Estimation - Customary Units




Sheet 3

Choose the object close to the given weight.

1) 1 pound

- 
- 
- 

2) 3 ounces

- 
- 
- 

3) 12 ounces

- 
- 
- 

PREVIEW

Gain complete access to the largest
collection of worksheets in all subjects!

Members, please
log in to
download this
worksheet.

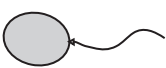


Not a member?
Please sign up to
gain complete
access.

www.mathworksheets4kids.com




5) 4 pounds

- 
- 
- 

7) 3 pounds

- 
- 
- 

8) 15 ounces

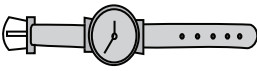


- 
- 
- 

Weight Estimation - Customary Units


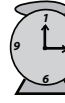

Sheet 3

Choose the object close to the given weight.

1) 1 pound

- 
- 
- 

2) 3 ounces

- 
- 
- 

3) 12 ounces

- 
- 
- 

PREVIEW

Gain complete access to the largest collection of worksheets in all subjects!

Members, please log in to download this worksheet.

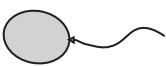


Not a member? Please sign up to gain complete access.

www.mathworksheets4kids.com



5) 4 pounds

- 
- 
- 

7) 3 pounds

- 
- 
- 

8) 15 ounces

- 
- 
- 