


Measuring Weight - Customary Units


ES3

Measure the weight of each object.

1)

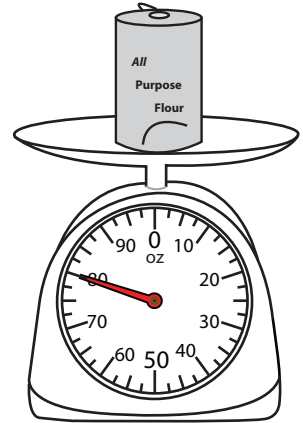


2)




_____ oz

3)



_____ oz

4)




_____ oz

Gain complete access to the largest collection of worksheets in all subjects!

Members, please log in to download this worksheet.


Not a member? Please sign up to gain complete access.

www.mathworksheets4kids.com




_____ oz

7)



_____ oz



_____ oz




_____ lb

Measuring Weight - Customary Units

ES3


Measure the weight of each object.

1)



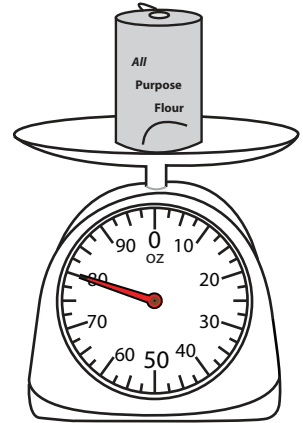
6

2)




7 oz

3)



80 oz

4)




15 oz

Gain complete access to the largest collection of worksheets in all subjects!

Members, please log in to download this worksheet.


Not a member? Please sign up to gain complete access.

www.mathworksheets4kids.com




4 oz

7)



90 oz



7 lb



5 lb