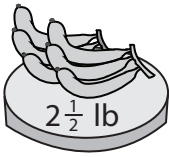



Weight Calculation - Customary Units

Calculate the weight.

1)



=

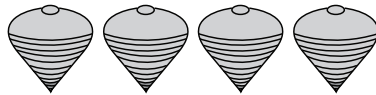


Weight of each  = _____ lb

2)



=



Weight of each  = _____ oz

3)



=


PREVIEW

Gain complete access to the largest collection of worksheets in all subjects!

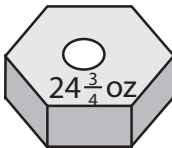
Members, please log in to download this worksheet.

Not a member? Please sign up to gain complete access.

www.mathworksheets4kids.com

ch  = _____ lb

4)



=


PREVIEW

Gain complete access to the largest collection of worksheets in all subjects!

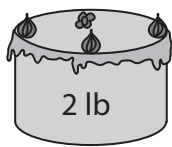
Members, please log in to download this worksheet.

Not a member? Please sign up to gain complete access.

www.mathworksheets4kids.com

ch  = _____ oz

5)



=


PREVIEW

Gain complete access to the largest collection of worksheets in all subjects!

Members, please log in to download this worksheet.

Not a member? Please sign up to gain complete access.

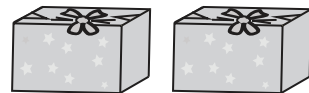
www.mathworksheets4kids.com

ch  = _____ lb

6)

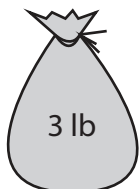


=




Weight of each  = _____ oz

7)



=

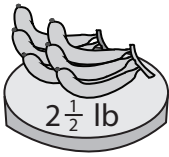


Weight of each  = _____ lb


Weight Calculation - Customary Units

Calculate the weight.

1)



=

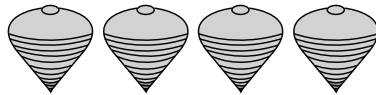


Weight of each  = 1 1/4 lb

2)



=




Weight of each  = 1 1/2 oz

3)



=

PREVIEW

ch  = 2 1/2 lb

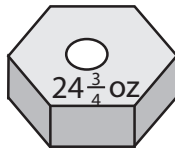
Gain complete access to the largest collection of worksheets in all subjects!

Members, please log in to download this worksheet.


Not a member? Please sign up to gain complete access.

www.mathworksheets4kids.com

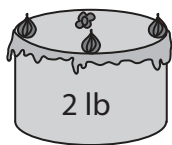
4)




=

ch  = 8 1/4 oz

5)



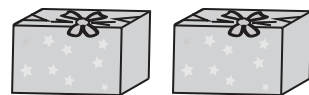
=

ch  = 1 lb

6)

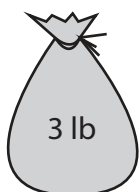


=




Weight of each  = 7 1/2 oz

7)



=



Weight of each  = 3/4 lb