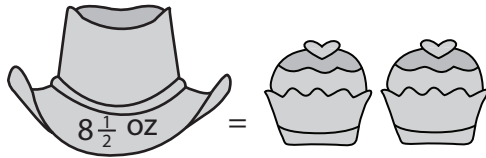


Weight Calculation - Customary Units

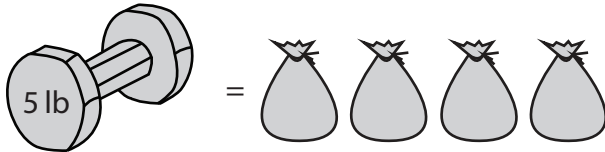
Calculate the weight.

1)



Weight of each  = _____ oz


2)



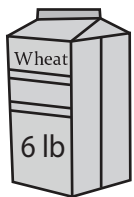
Weight of each  = _____ lb


3)




ch  = _____ oz


4)



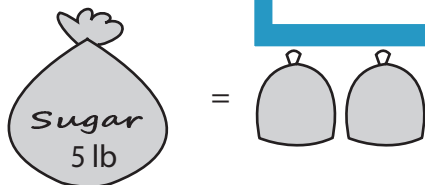
ch  = _____ lb

5)



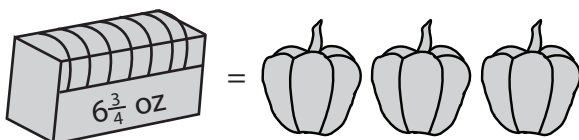
ch  = _____ oz

6)



Weight of each  = _____ lb

7)



Weight of each  = _____ oz

PREVIEW

Gain complete access to the largest collection of worksheets in all subjects!

Members, please log in to download this worksheet.

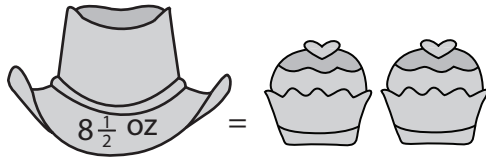
Not a member? Please sign up to gain complete access.

www.mathworksheets4kids.com

Weight Calculation - Customary Units

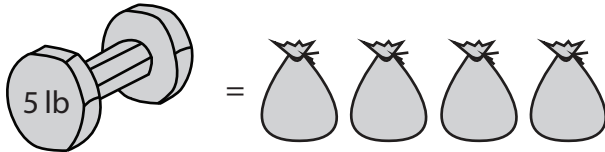
Calculate the weight.

1)



Weight of each  = 4 $\frac{1}{4}$ oz


2)



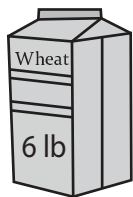
Weight of each  = 1 $\frac{1}{4}$ lb


3)



ch  = 3 $\frac{1}{2}$ oz


4)



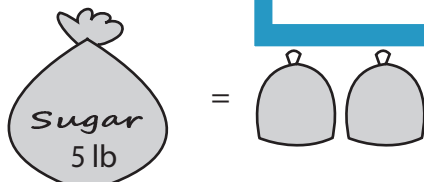
ch  = 1 $\frac{1}{2}$ lb

5)



ch  = 8 oz

6)



Weight of each  = 2 $\frac{1}{2}$ lb

7)



Weight of each  = 2 $\frac{1}{4}$ oz

PREVIEW

Gain complete access to the largest collection of worksheets in all subjects!

Members, please log in to download this worksheet.

Not a member? Please sign up to gain complete access.

www.mathworksheets4kids.com