

Name : \_\_\_\_\_

## Choosing 2D Shapes

Identify the 2D shapes and check the appropriate boxes.

1)

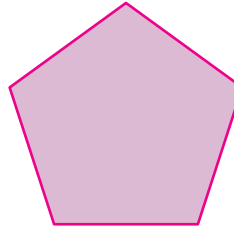


parallelogram

square

triangle

2)



pentagon

rhombus

trapezoid

3)




rhombus

trapezoid

hexagon

4)

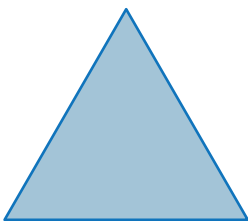


circle

triangle

square

5)



rectangle

rhombus

triangle

6)




pentagon

parallelogram

square

7)




hexagon

pentagon

trapezoid

8)



parallelogram

rhombus

rectangle