

Name : \_\_\_\_\_

## Telling Time


Hourly: S1

A) Read each clock, and write the time.

1)




2)




3)



4)



5)




6)




B) Choose the clock that shows the given time.

Time : 4:00


A)




B)



C)



C) Choose the correct time shown by the clock.



A)

**12:00**

B)

**2:00**

C)

**3:00**