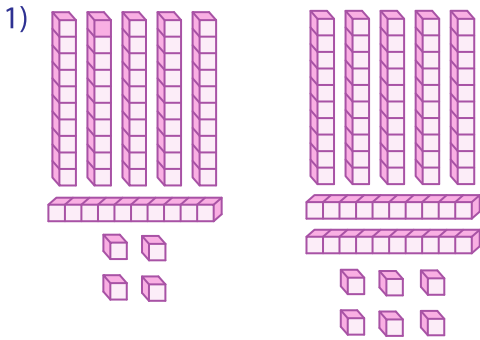
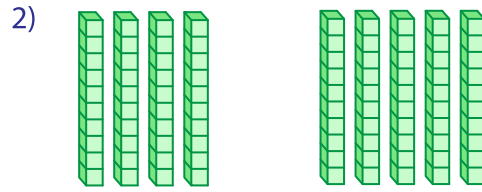


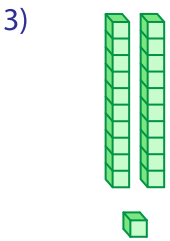
Base Ten Blocks



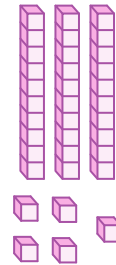
$$\square + \square = \square$$



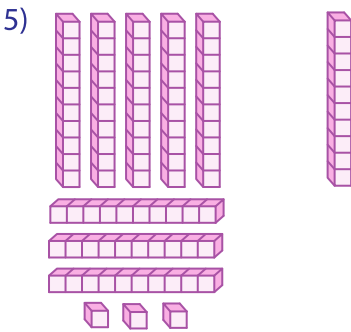
$$\square + \square = \square$$



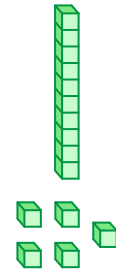
$$\square + (\square) = \square$$




$$\square = \square$$



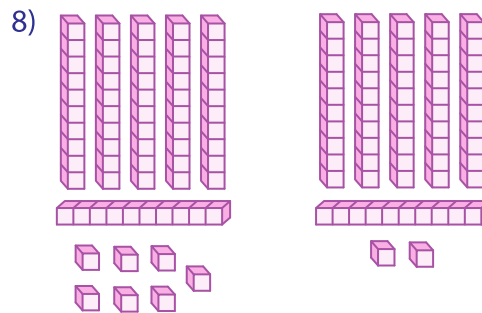
$$\square + (\square) = \square$$



$$\square = \square$$



$$\square + \square = \square$$



$$\square + \square = \square$$

PREVIEW

Gain complete access to the largest collection of worksheets in all subjects!

Members, please log in to download this worksheet.

Not a member? Please sign up to gain complete access.

www.mathworksheets4kids.com