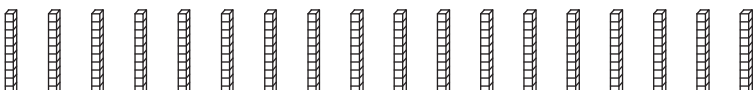





**Hundreds & Tens**


How many hundreds can you form? Also find the tens that left over.


1)  \_\_\_\_\_ hundreds \_\_\_\_\_ tens



2)  \_\_\_\_\_ hundreds \_\_\_\_\_ tens





3)  \_\_\_\_\_ hundreds \_\_\_\_\_ tens

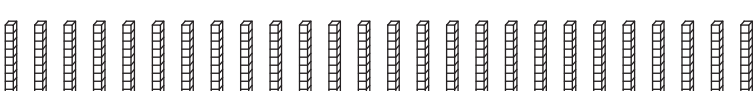



4)  \_\_\_\_\_ hundreds \_\_\_\_\_ tens



5)  \_\_\_\_\_ hundreds \_\_\_\_\_ tens



6)  \_\_\_\_\_ hundreds \_\_\_\_\_ tens



**PREVIEW**

Gain complete access to the largest collection of worksheets in all subjects!

Members, please log in to download this worksheet.

Not a member? Please sign up to gain complete access.

[www.mathworksheets4kids.com](http://www.mathworksheets4kids.com)