


Name: \_\_\_\_\_

## Telling Time


5 minutes: S1

A) Read each clock, and write the time.


1)



2)




3)



4)



5)




6)




B) Choose the clock that shows the given time.

Time : 12:35


A)




B)



C)



C) Choose the correct time shown by the clock.



A)

**4:50**

B)

**10:20**

C)

**3:50**