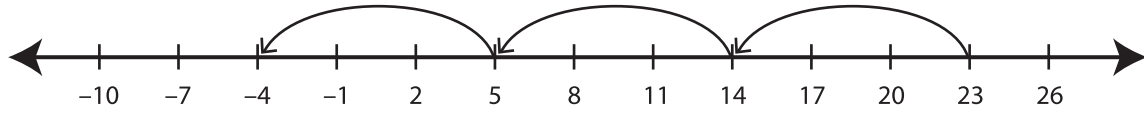


Recognizing Pattern

MS3

Describe the pattern followed by the hops in each number line.

1)



Start at 23. Subtract 9 each time.

2)



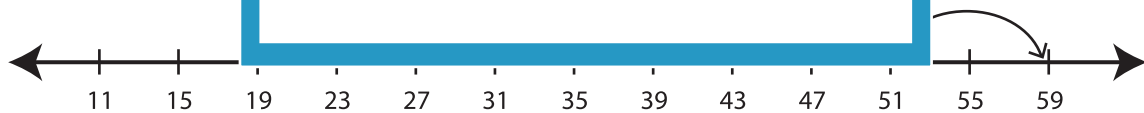
3)



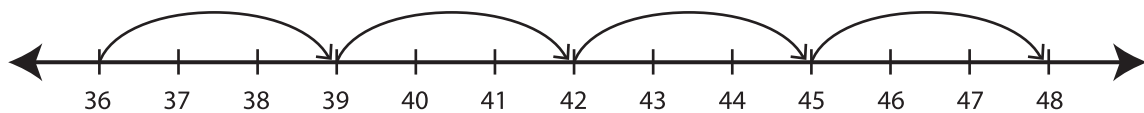
4)



5)



6)



PREVIEW

Gain complete access to the largest collection of worksheets in all subjects!

Members, please log in to download this worksheet.

Not a member? Please sign up to gain complete access.

www.mathworksheets4kids.com