

Name : _____

Quadrilaterals

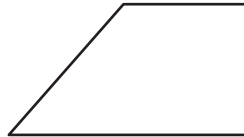
L2S1

Identify each quadrilateral.

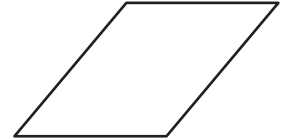
1)



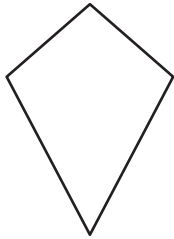
2)



3)



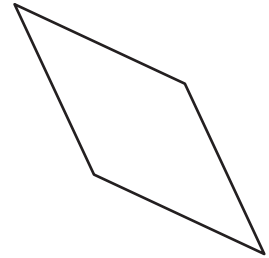
4)



5)



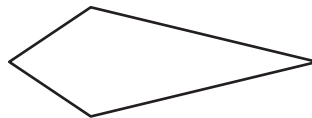
6)




7)



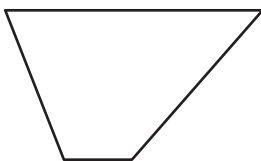
8)



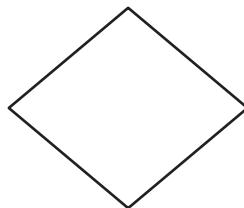
9)



10)



11)



12)

