


Name : _____

Telling Time


1 Minute: S3

A) Read each clock, and write the time.

1)




2)



3)



4)




B) Choose the clock

Time : 2:38

www.mathworksheets4kids.com

C)



C) Choose the correct time shown by the clock.



A)

9:59

B)

11:47

C)

10:47