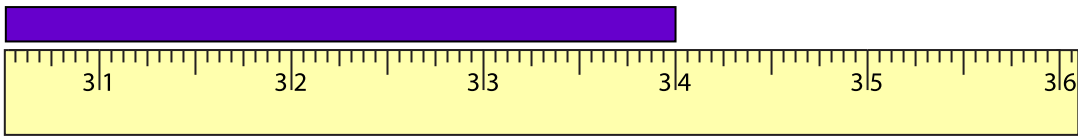


Name : \_\_\_\_\_

# U.S. Customary Unit Conversion

Example:



\_\_\_\_\_ **2** \_\_\_\_\_ feet \_\_\_\_\_ **10** \_\_\_\_\_ inches

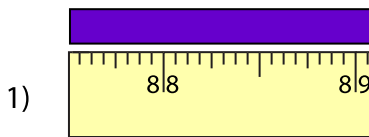
Length = 34 inches

**1 foot = 12 inches**

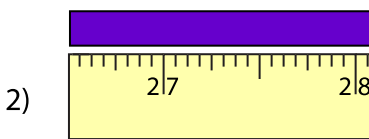
There are 2 feet 10 inches in 34 inches

$$\begin{array}{r} 2 \text{ - feet} \\ 12 \overline{) 34} \\ \underline{24} \\ 10 \text{ - inches} \end{array}$$

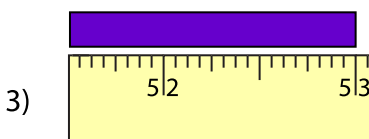
Measure the length of each strip of paper using the ruler. Write your answer in feet and inches.



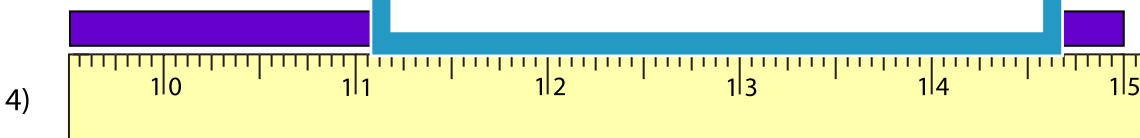
\_\_\_\_\_ feet \_\_\_\_\_



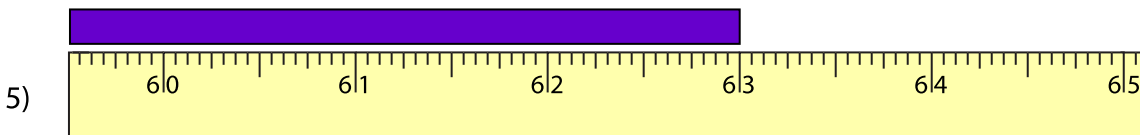
\_\_\_\_\_ feet \_\_\_\_\_



\_\_\_\_\_ feet \_\_\_\_\_



\_\_\_\_\_ feet \_\_\_\_\_ inches



\_\_\_\_\_ feet \_\_\_\_\_ inches

**PREVIEW**

Gain complete access to the largest collection of worksheets in all subjects!

Members, please log in to download this worksheet.

Not a member? Please sign up to gain complete access.

[www.mathworksheets4kids.com](http://www.mathworksheets4kids.com)