

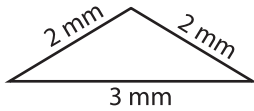
Name : \_\_\_\_\_

## Identifying Triangles

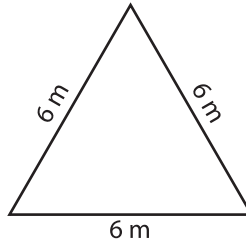
Sides - Numerals: S3

Identify each triangle based on sides. (Equilateral, Isosceles or Scalene)

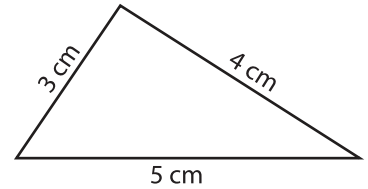
1)



2)



3)



Isosceles triangle

4)



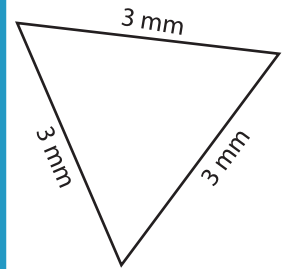
# PREVIEW

Gain complete access to the largest collection of worksheets in all subjects!

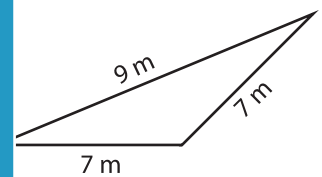
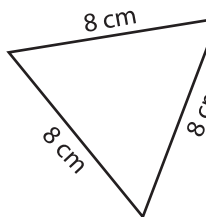
Members, please log in to download this worksheet.

Not a member? Please sign up to gain complete access.

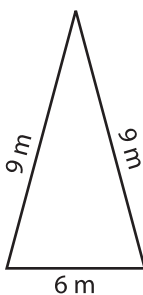
[www.mathworksheets4kids.com](http://www.mathworksheets4kids.com)



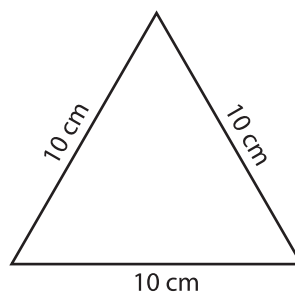
7)



10)



11)



12)

