

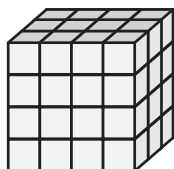
Name : _____

Counting Cubes - Rectangular Prisms

ES3

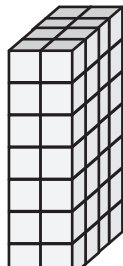
Count the unit cubes and find the volume of each rectangular prism.  = 1 yd³

1)



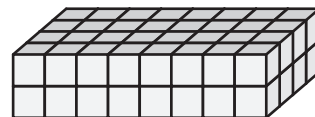
Volume = _____

2)




Volume = _____

3)



4)



Volume = _____

PREVIEW
Gain complete access to the largest collection of worksheets in all subjects!


Members, please log in to download this worksheet.

Not a member? Please sign up to gain complete access.


www.mathworksheets4kids.com

Volume = _____

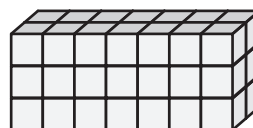
7)



Volume = _____



Volume = _____



Volume = _____