

Name : _____

Solving Equations - Rectangles

Find the value of x .


1)



$x =$ _____

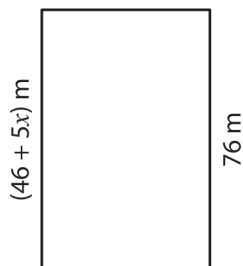
2)

$(9x - 58)$ cm



$x =$ _____

3)



$x =$ _____

4)


20 mm



$x =$ _____

5)

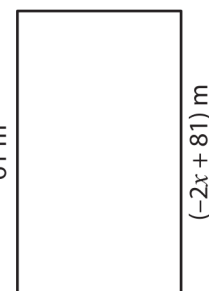
$\left(\frac{x}{2}\right)$ cm



$x =$ _____

6)

61 m



$x =$ _____

7)


84 mm



$x =$ _____

8)

33 cm



$x =$ _____