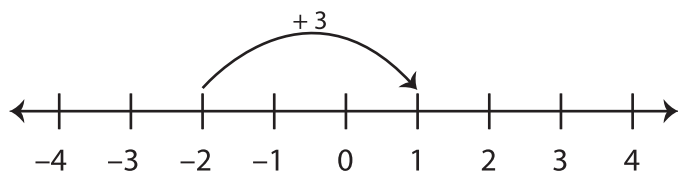
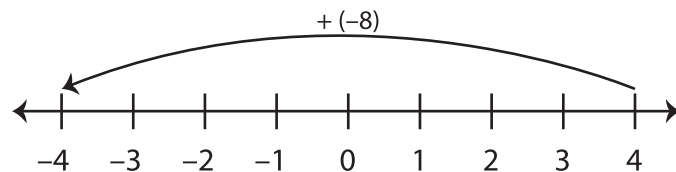


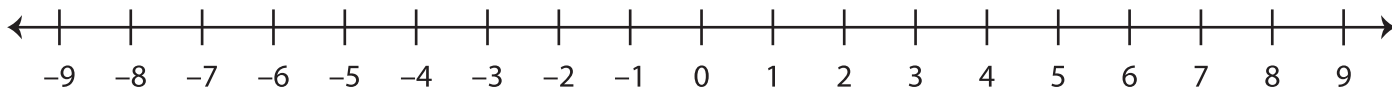
Number Line - Adding Integers

Sheet 1

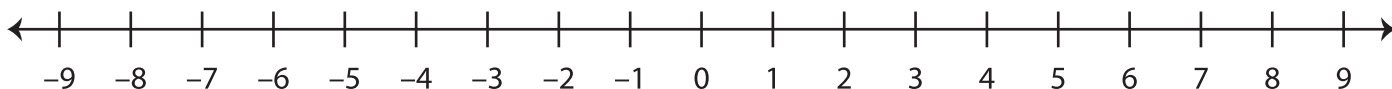
Example 1: $-2 + 3 = 1$ **Example 2:** $4 + (-8) = -4$ 

Use the number line to find the sum.

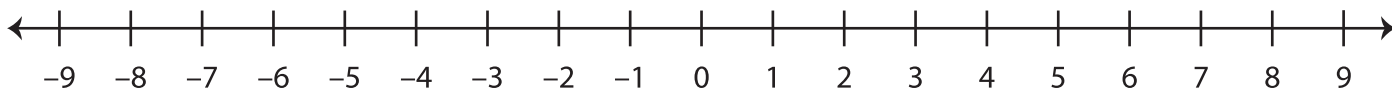
1) $4 + (-5) =$ _____



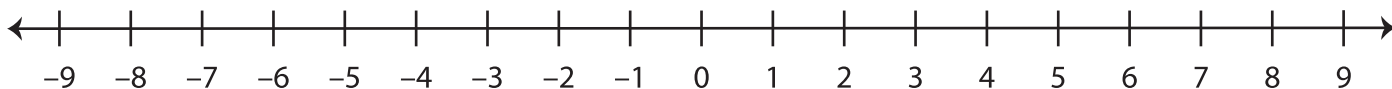
2) $-7 + 2 =$ _____



3) $-3 + (-4) =$ _____



4) $1 + 7 =$ _____



5) $3 + (-12) =$ _____

