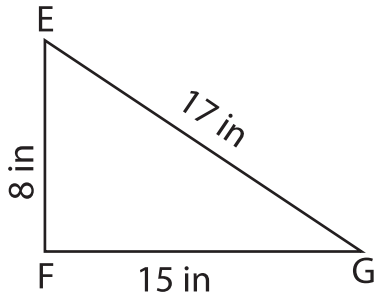


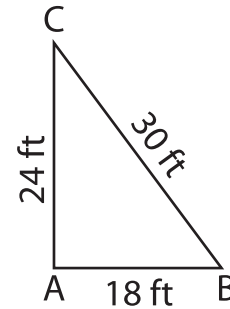
**Identify the right triangles**

Apply the Pythagorean theorem. Find whether each triangle has a right angle.

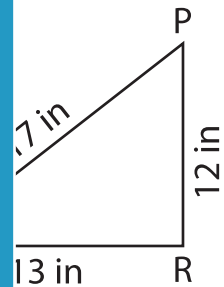
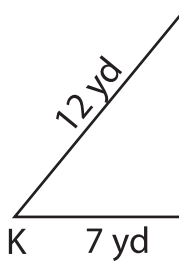
1)



2)



3)



# PREVIEW

Gain complete access to the largest collection of worksheets in all subjects!

Members, please log in to download this worksheet.

Not a member? Please sign up to gain complete access.

[www.mathworksheets4kids.com](http://www.mathworksheets4kids.com)

5) In triangle UVW, the sides UV and VW measure 12 in and 6 yd respectively. Prove that UVW is a right triangle.

\_\_\_\_\_ and 6 yd respectively.

6) In triangle LMN, the sides LM, MN and LN measure 9 in, 15 in and 12 in respectively. Prove that LMN is a right triangle.