

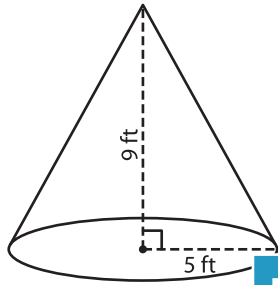
Name : _____

Volume - Cone

Integers: ES4

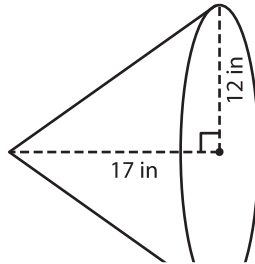
A) Find the volume of each cone. Round your answer to two decimal places.
(use $\pi = 3.14$)

1)



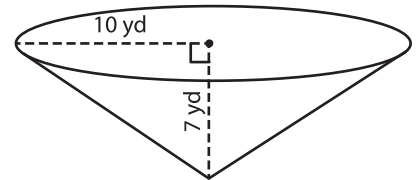
Volume = _____

2)



Volume = _____

3)



Volume = _____

B) Find the volume of each cone. Round your answer to two decimal places.

4) radius = 8 in ; height = 10 in

Volume = _____

6) height = 18 yd ; radius = 5 yd

Volume = _____

Volume = _____

8) A conical water tank has a radius of 6 feet and a depth of 24 feet. What is the capacity of the tank? (use $\pi = 3.14$)

PREVIEW

Gain complete access to the largest collection of worksheets in all subjects!

Members, please log in to download this worksheet.

Not a member? Please sign up to gain complete access.

www.mathworksheets4kids.com