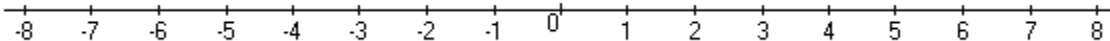


Student Name: _____

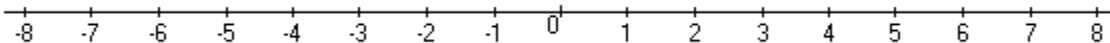
Score: _____

Graph the Absolute Value

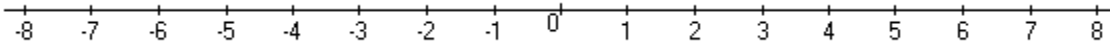
$$|n| > 5$$



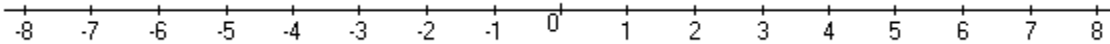
$$|k| \leq 4$$



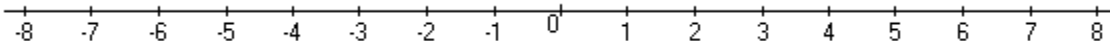
$$|b| < 1$$



$$|x| \leq 3$$



$$|r| > 6$$

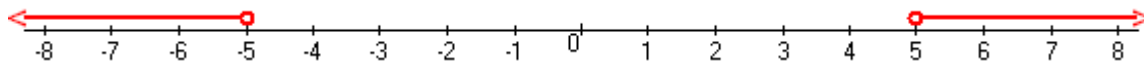


Student Name: _____

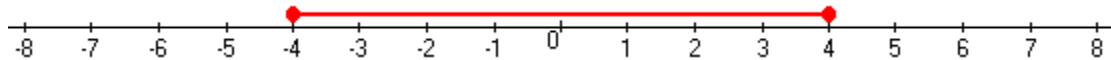
Score: _____

Answers

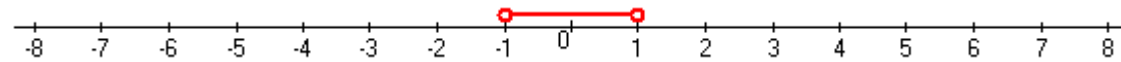
$$|n| > 5$$



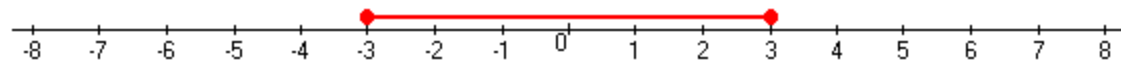
$$|k| \leq 4$$



$$|b| < 1$$



$$|x| \leq 3$$



$$|r| > 6$$

