

Name : \_\_\_\_\_

# Addition and Subtraction

Within 10: S2

Count the pictures in each set and write the addition or subtraction sentence.

1)

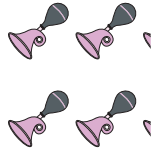


+

=

\_\_\_\_\_

2)



\_\_\_\_\_


# PREVIEW

Gain complete access to the largest collection of worksheets in all subjects!

=

\_\_\_\_\_

3)



\_\_\_\_\_


Members, please log in to download this worksheet.

Not a member? Please sign up to gain complete access.

=

\_\_\_\_\_

4)



\_\_\_\_\_

[www.mathworksheets4kids.com](http://www.mathworksheets4kids.com)

-

=

\_\_\_\_\_

\_\_\_\_\_

5)



+



+

=

\_\_\_\_\_

\_\_\_\_\_

\_\_\_\_\_