

Name : _____

Addition and Subtraction

Within 5: S1

Count the pictures in each set and write the addition or subtraction sentence.

1)



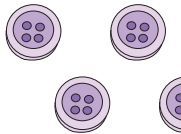
+



+

=

2)




PREVIEW

Gain complete access to the largest collection of worksheets in all subjects!

=

3)

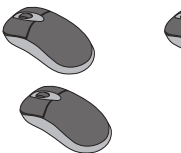


Members, please log in to download this worksheet.

Not a member? Please sign up to gain complete access.

=

4)



-

=

5)



+



+

=
