


Name : _____


Single Digit Addition

Sheet 2

- 1) Juan has a collection of 9 vintage paintings. If he adds 8 antique paintings to it, how many paintings are in his collection?



- 2) Ethan bought 2 pounds of apples and 4 pounds of pears to make jam. How much do the fruits weigh altogether?



- 3) William had 8 papaya many papaya saplings:

PREVIEW


Gain complete access to the largest collection of worksheets in all subjects!

Members, please log in to download this worksheet.

Not a member? Please sign up to gain complete access.


www.mathworksheets4kids.com

- d 4 more saplings. How



- 4) Daisy and her friends many refreshments di

- es and 7 soft drinks. How




- 5) Gabriel has 5 shirts in

- ts are in the wardrobe?



- 6) Oliver bought two crates in it. How many milk cartons did the crates hold in all?

- her crate had 7 milk cartons



- 7) Seven children were engaged in a game of tug of war. 3 more children joined them. How many children in all were engaged in the game?

