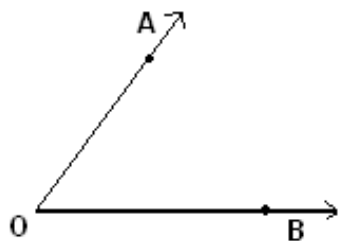


Student Name: \_\_\_\_\_

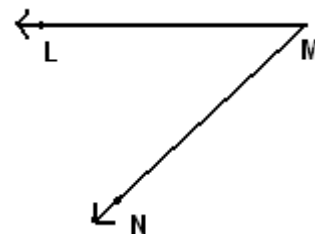
Score: \_\_\_\_\_

**Vertex and Sides Formed by Angles**

Name the vertex and sides formed by the angles:



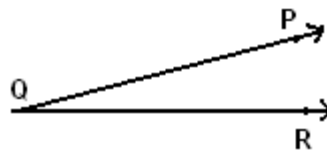
Vertex: \_\_\_\_\_ Sides: \_\_\_\_\_



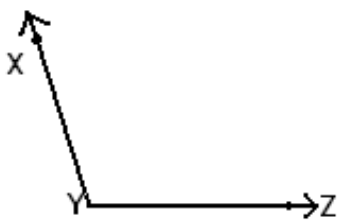
Vertex: \_\_\_\_\_ Sides: \_\_\_\_\_



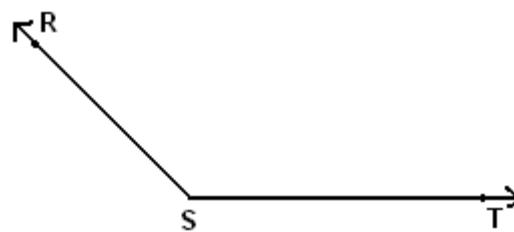
Vertex: \_\_\_\_\_ Sides: \_\_\_\_\_



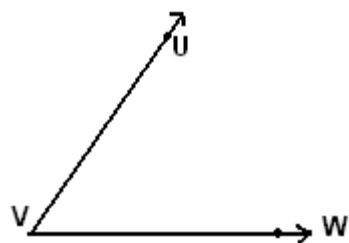
Vertex: \_\_\_\_\_ Sides: \_\_\_\_\_



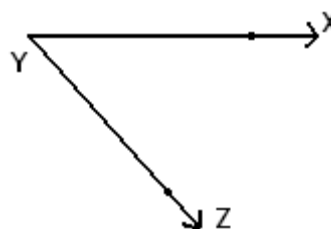
Vertex: \_\_\_\_\_ Sides: \_\_\_\_\_



Vertex: \_\_\_\_\_ Sides: \_\_\_\_\_



Vertex: \_\_\_\_\_ Sides: \_\_\_\_\_

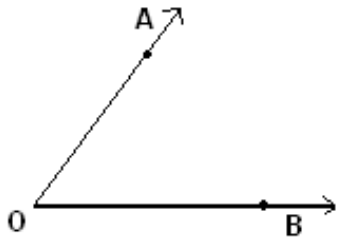


Vertex: \_\_\_\_\_ Sides: \_\_\_\_\_

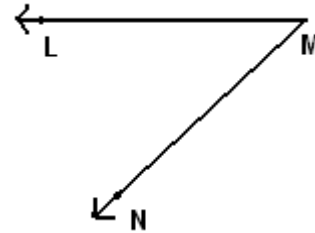
Student Name: \_\_\_\_\_

Score: \_\_\_\_\_

### Answers



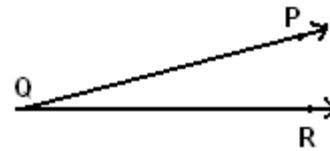
Vertex: **O** Sides:  $\overrightarrow{OA}$  and  $\overrightarrow{OB}$



Vertex: **M** Sides:  $\overrightarrow{ML}$  and  $\overrightarrow{MN}$



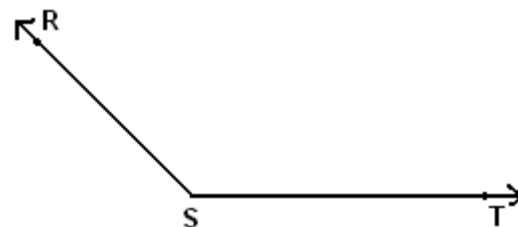
Vertex: **M** Sides:  $\overrightarrow{ML}$  and  $\overrightarrow{MN}$



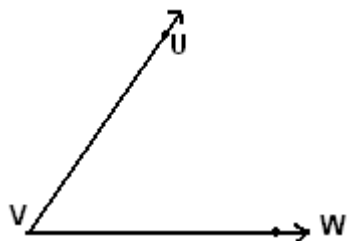
Vertex: **Q** Sides:  $\overrightarrow{QP}$  and  $\overrightarrow{QR}$



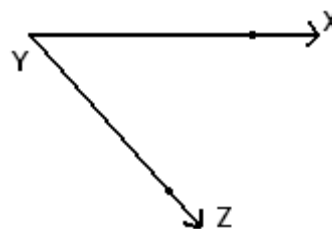
Vertex: **Y** Sides:  $\overrightarrow{YX}$  and  $\overrightarrow{YZ}$



Vertex: **S** Sides:  $\overrightarrow{SR}$  and  $\overrightarrow{ST}$



Vertex: **V** Sides:  $\overrightarrow{VU}$  and  $\overrightarrow{VW}$



Vertex: **Y** Sides:  $\overrightarrow{YX}$  and  $\overrightarrow{YZ}$