

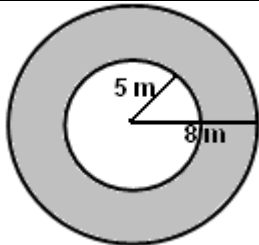
Student Name: _____

Score: _____

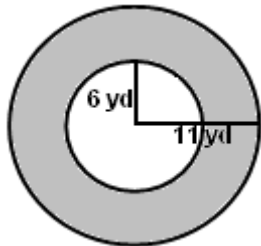
Area of Annulus Worksheet

Find the area of the circular ring using inner and outer radius. Round your answers nearest to the hundredth:

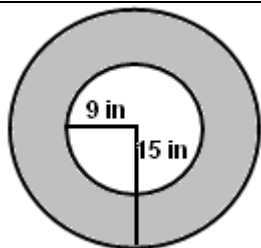
Work Space



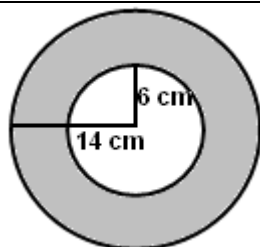
Area of circular ring= _____



Area of circular ring= _____



Area of circular ring= _____

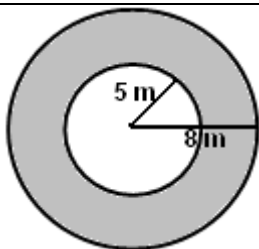


Area of circular ring= _____

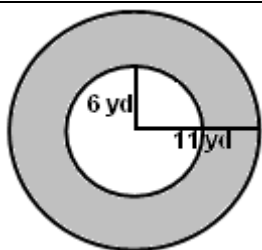
Student Name: _____

Score: _____

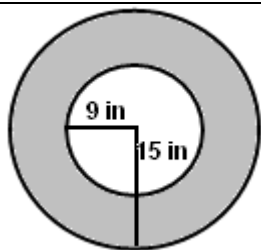
Answers



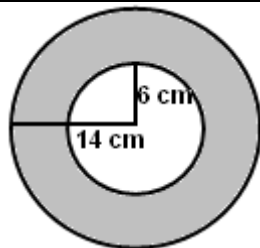
Area of circular ring= 122.52 m^2



Area of circular ring= 267.04 yd^2



Area of circular ring= 452.39 in^2



Area of circular ring= 502.65 cm^2