

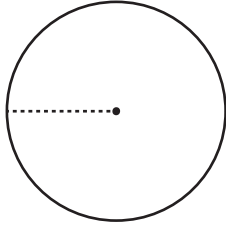
Name : _____

Area

ES1

Find the area of each circle in terms of π .

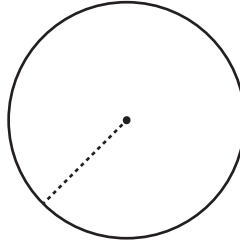
1)



Circumference = 40π in

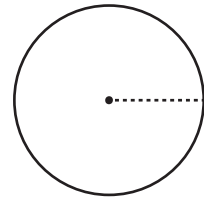
Area = _____

2)



Circumference = 12π ft

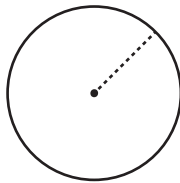
3)



Circumference = 26π yd

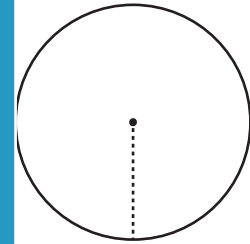
Area = _____

4)



Circumference = 32π ft

Area = _____



Circumference = 30π ft

Area = _____

PREVIEW

Gain complete access to the largest collection of worksheets in all subjects!

Members, please log in to download this worksheet.

Not a member? Please sign up to gain complete access.

www.mathworksheets4kids.com

7) A circle has a circumference of 48π ft.

Area = _____

8) The circumference of a circular park is 34π yd. What is the area of the park in terms of π ?

Area = _____