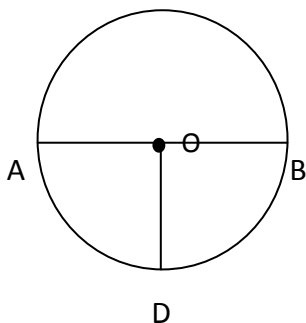


Student Name: _____

Score: _____

Basic Circle Worksheet

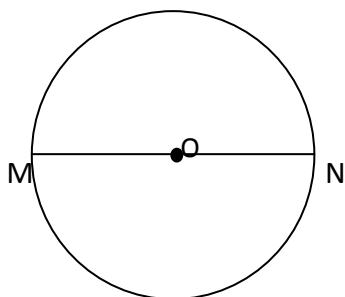
Identify center, radius and diameter of the given circles:



OD = _____

AB = _____

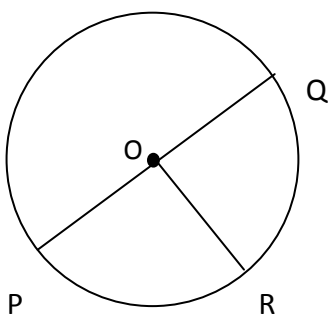
O = _____



Center = _____

Radius = _____ or _____

Diameter = _____



Center = _____

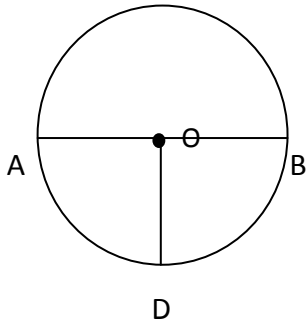
Radius = _____ or _____ or _____

Diameter = _____

Student Name: _____

Score: _____

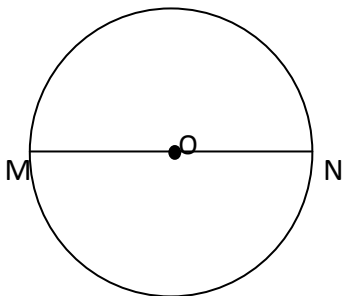
Answers



$OD = \text{radius}$

$AB = \text{diameter}$

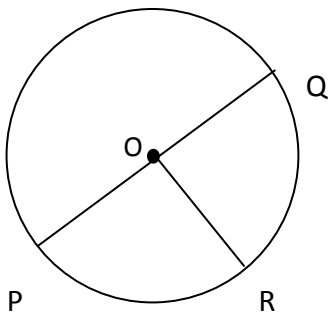
$O = \text{center}$



Center = O

Radius = MO or ON

Diameter = MN



Center = O

Radius = OP or OQ or OR

Diameter = PQ