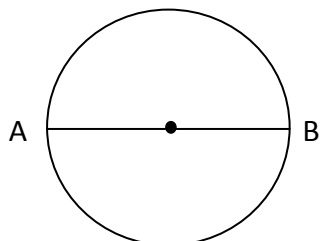


Student Name: \_\_\_\_\_

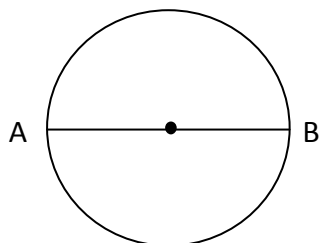
Score: \_\_\_\_\_

**Find diameter of the Circles**



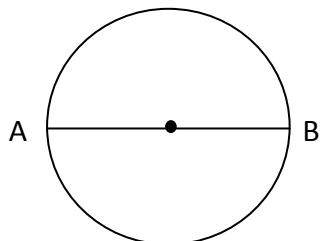
Radius= 5 m

Diameter= \_\_\_\_\_



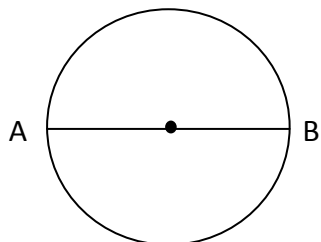
Radius= 11 cm

Diameter= \_\_\_\_\_



Radius= 6.3 m

Diameter= \_\_\_\_\_



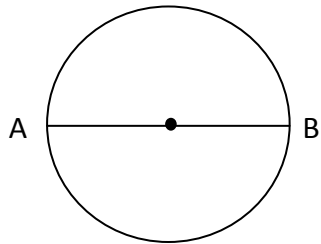
Radius= 4.9 cm

Diameter= \_\_\_\_\_

Student Name: \_\_\_\_\_

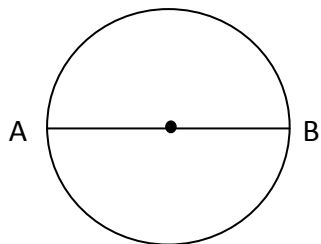
Score: \_\_\_\_\_

### Answers



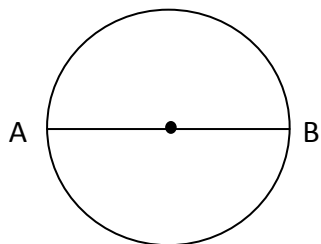
Radius= 5 m

Diameter= 10 m



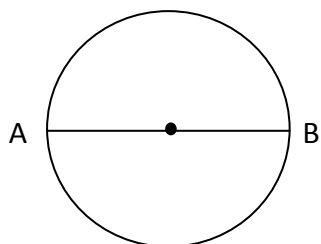
Radius= 11 cm

Diameter= 22 cm



Radius= 6.3 m

Diameter= 12.6 m



Radius= 4.9 cm

Diameter= 9.8 cm