

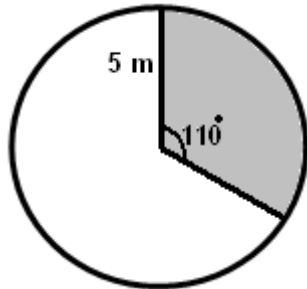
Student Name: \_\_\_\_\_

Score: \_\_\_\_\_

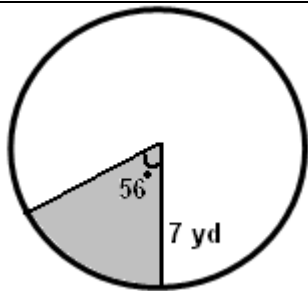
### Length of the Arc Worksheet

Find the length of the arc of each circle. Round your answers to the nearest hundredth:

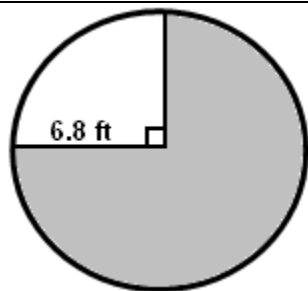
Work Space



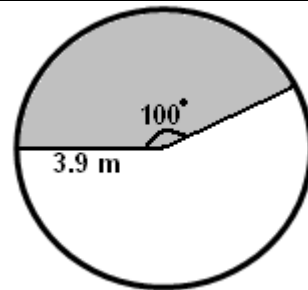
Length of the arc = \_\_\_\_\_



Length of the arc = \_\_\_\_\_



Length of the arc = \_\_\_\_\_

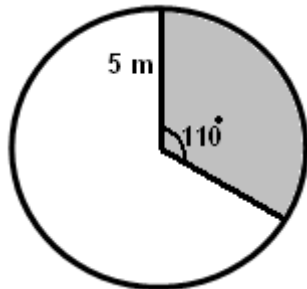


Length of the arc = \_\_\_\_\_

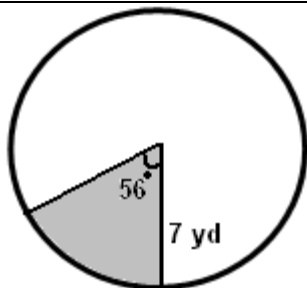
Student Name: \_\_\_\_\_

Score: \_\_\_\_\_

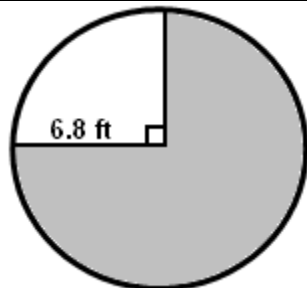
### Answers



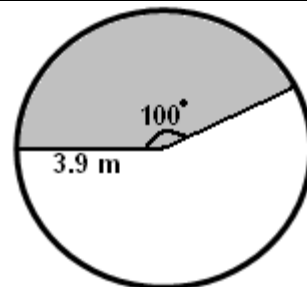
Length of the arc = 9.60 m



Length of the arc = 6.84 yd



Length of the arc = 32.04 ft



Length of the arc = 6.81 m