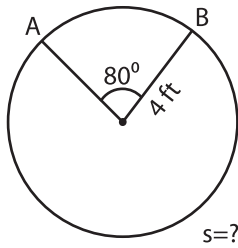


Length of Arc

Example:



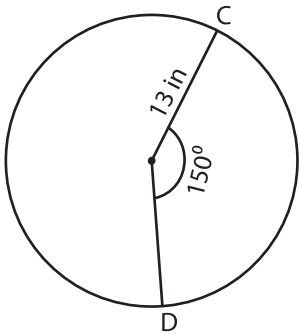
$$\text{Arc length of a sector (s)} = \frac{\text{central angle}}{180^\circ} \times \pi \times \text{radius} = \frac{\theta \times \pi \times r}{180^\circ}$$

$$= \frac{80^\circ \times 3.14 \times 4}{180^\circ}$$

Length of the arc AB = **5.58 ft**

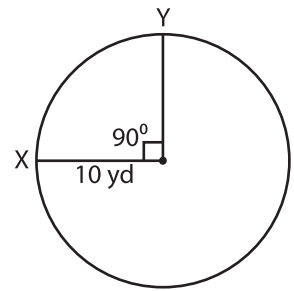
Find the arc length of each sector. Round the answer to two decimal places. (use $\pi=3.14$)

1)



Length of the arc CD = _____

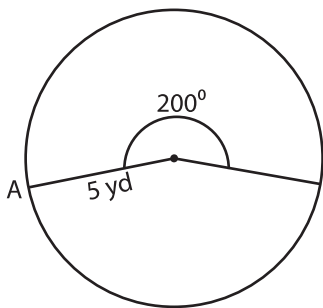
2)



Length of the arc XY = _____

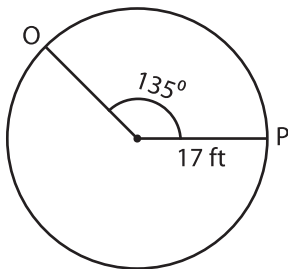
3)

4)

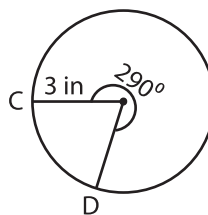


Length of the arc AB = _____

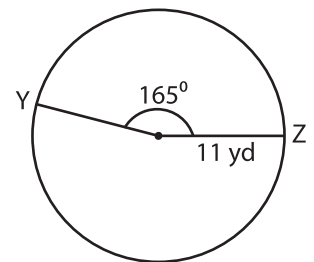
7)



Length of the arc OP = _____



Length of the arc CD = _____



Length of the arc YZ = _____

PREVIEW

Gain complete access to the largest collection of worksheets in all subjects!

Members, please log in to download this worksheet.

Not a member? Please sign up to gain complete access.

www.mathworksheets4kids.com