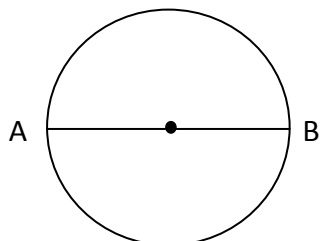


Student Name: _____

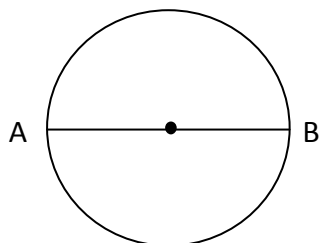
Score: _____

Find Radius of the Circles



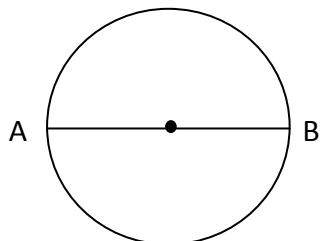
Diameter = 12 cm

Radius = _____



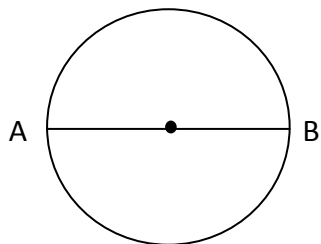
Diameter = 18 m

Radius = _____



Diameter = 9 m

Radius = _____



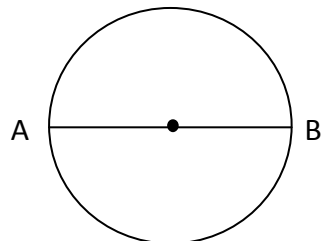
Diameter = 3.4 cm

Radius = _____

Student Name: _____

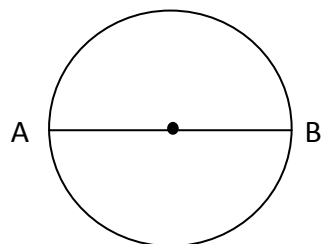
Score: _____

Answers



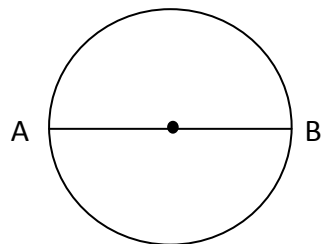
Diameter = 12 cm

Radius = 6 cm



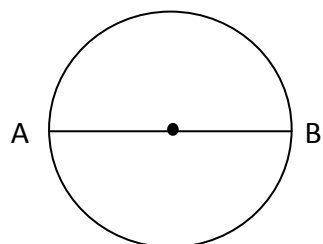
Diameter = 18 m

Radius = 9 m



Diameter = 9 m

Radius = 4.5 m



Diameter = 3.4 cm

Radius = 1.7 cm