


Division Facts

Sheet 1

Example:

Divide into groups of 2:



Total items

Items in each group

Number of groups

$$\boxed{8} \div \boxed{2} = \boxed{4}$$

1) Divide into groups of 2:



Total items

Items in each group

Number of groups

$$\boxed{} \div \boxed{} = \boxed{}$$

2) Divide into groups of 4:




Total items

Items in each group

Number of groups

$$\boxed{} \div \boxed{} = \boxed{}$$

3) Divide into groups of 3:



Total items

Items in each group

Number of groups

$$\boxed{} \div \boxed{} = \boxed{}$$

4) Divide into groups of 5:




Total items

Items in each group

Number of groups

$$\boxed{} \div \boxed{} = \boxed{}$$

5) Divide into groups of 2:



Total items

Items in each group

Number of groups

$$\boxed{} \div \boxed{} = \boxed{}$$

6) Divide into groups of 3:



Total items

Items in each group

Number of groups

$$\boxed{} \div \boxed{} = \boxed{}$$

7) Divide into groups of 2:




Total items

Items in each group

Number of groups

$$\boxed{} \div \boxed{} = \boxed{}$$

8) Divide into groups of 6:



Total items

Items in each group

Number of groups


$$\boxed{} \div \boxed{} = \boxed{}$$

Answer key**Division Facts**

Sheet 1

Example:

Divide into groups of 2:



Total items

Items in each group

Number of groups

$$\boxed{8} \div \boxed{2} = \boxed{4}$$

1) Divide into groups of 2:




Total items

Items in each group

Number of groups

$$\boxed{6} \div \boxed{2} = \boxed{3}$$

2) Divide into groups of 4:




Total items

Items in each group

Number of groups

$$\boxed{8} \div \boxed{4} = \boxed{2}$$

3) Divide into groups of 3:



Total items

Items in each group

Number of groups

$$\boxed{9} \div \boxed{3} = \boxed{3}$$

4) Divide into groups of 5:



Total items

Items in each group

Number of groups

$$\boxed{10} \div \boxed{5} = \boxed{2}$$

5) Divide into groups of 2:



Total items

Items in each group

Number of groups

$$\boxed{4} \div \boxed{2} = \boxed{2}$$

6) Divide into groups of 3:



Total items

Items in each group

Number of groups

$$\boxed{6} \div \boxed{3} = \boxed{2}$$

7) Divide into groups of 2:



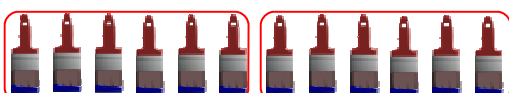
Total items

Items in each group

Number of groups

$$\boxed{10} \div \boxed{2} = \boxed{5}$$

8) Divide into groups of 6:



Total items

Items in each group

Number of groups

$$\boxed{12} \div \boxed{6} = \boxed{2}$$