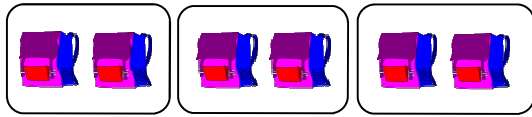


Division Facts


Sheet 1

Example:


Write division sentence:



$$\boxed{6} \div \boxed{2} = \boxed{3}$$



$$\boxed{} \div \boxed{} = \boxed{}$$



$$\boxed{} \div \boxed{} = \boxed{}$$



$$\boxed{} \div \boxed{} = \boxed{}$$



$$\boxed{} \div \boxed{} = \boxed{}$$



$$\boxed{} \div \boxed{} = \boxed{}$$




$$\boxed{} \div \boxed{} = \boxed{}$$



$$\boxed{} \div \boxed{} = \boxed{}$$



$$\boxed{} \div \boxed{} = \boxed{}$$



$$\boxed{} \div \boxed{} = \boxed{}$$



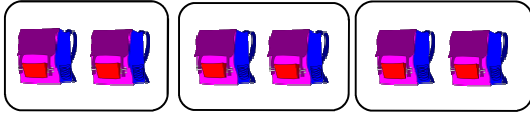
$$\boxed{} \div \boxed{} = \boxed{}$$

Answer key**Division Facts**


Sheet 1

Example:

Write division sentence:



$$\boxed{6} \div \boxed{2} = \boxed{3}$$



$$\boxed{8} \div \boxed{4} = \boxed{2}$$



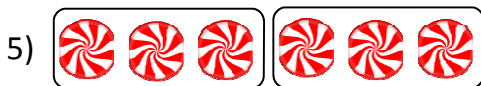
$$\boxed{15} \div \boxed{5} = \boxed{3}$$



$$\boxed{9} \div \boxed{3} = \boxed{3}$$



$$\boxed{4} \div \boxed{2} = \boxed{2}$$




$$\boxed{6} \div \boxed{3} = \boxed{2}$$




$$\boxed{8} \div \boxed{2} = \boxed{4}$$



$$\boxed{10} \div \boxed{5} = \boxed{2}$$



$$\boxed{12} \div \boxed{6} = \boxed{2}$$



$$\boxed{10} \div \boxed{2} = \boxed{5}$$



$$\boxed{12} \div \boxed{4} = \boxed{3}$$