




Student Name: _____

Score: _____

Name the 2D Shapes










Student Name: _____

Score: _____

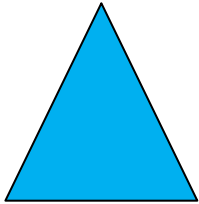
Answers



Square



Circle



Triangle



Rectangle