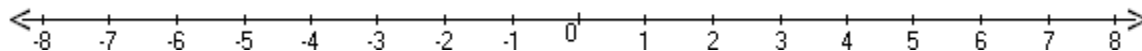


Student Name: \_\_\_\_\_

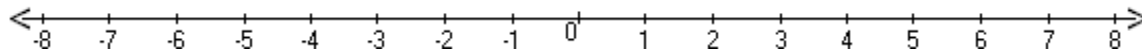
Score: \_\_\_\_\_

**Graph the Inequalities**

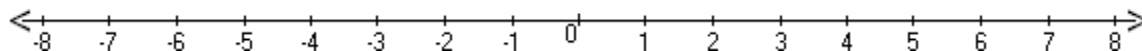
$$a \geq -1$$



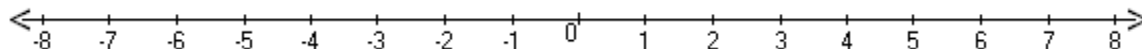
$$n < -6$$



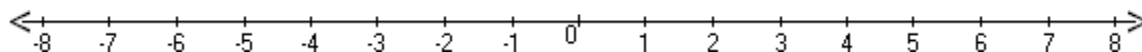
$$5 \leq k$$



$$-6 \geq -r$$



$$h < 7$$

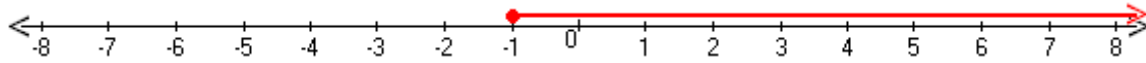


Student Name: \_\_\_\_\_

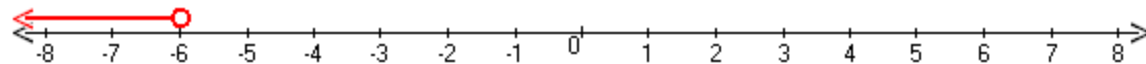
Score: \_\_\_\_\_

### Answers

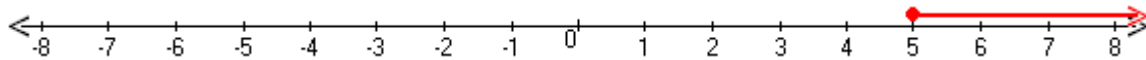
$$a \geq -1$$



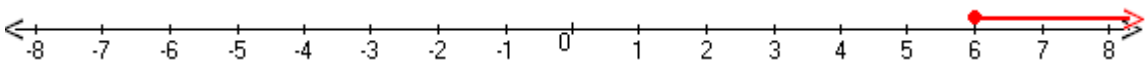
$$n < -6$$



$$5 \leq k$$



$$-6 \geq -r$$



$$h < 7$$

