

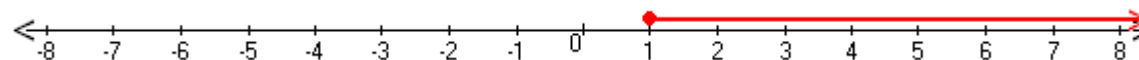
Student Name: _____

Score: _____

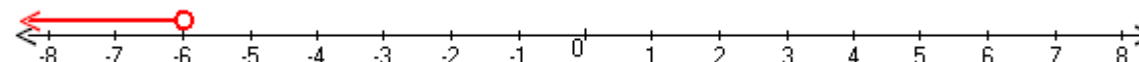
Write the Inequalities for Graphs



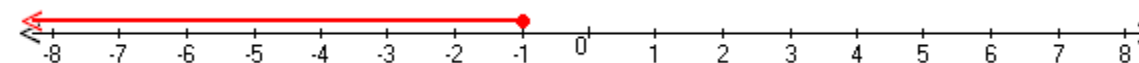
Inequality: _____



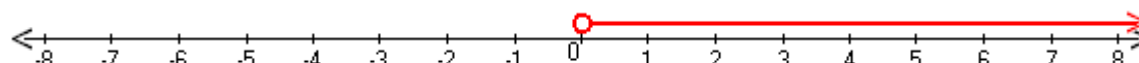
Inequality: _____



Inequality: _____



Inequality: _____

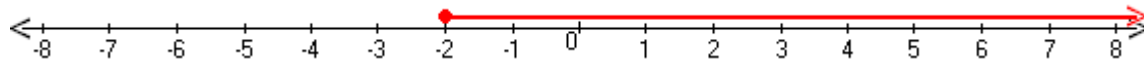


Inequality: _____

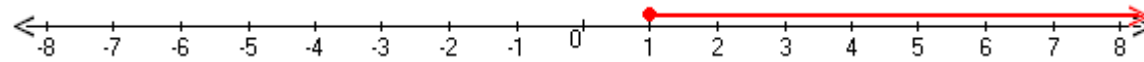
Student Name: _____

Score: _____

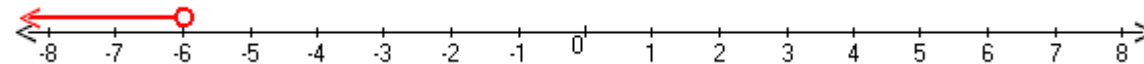
Answers



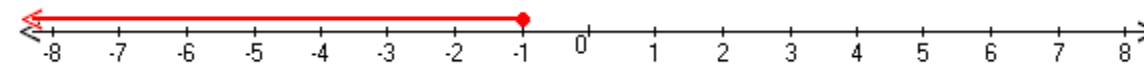
Inequality: $x \geq -2$



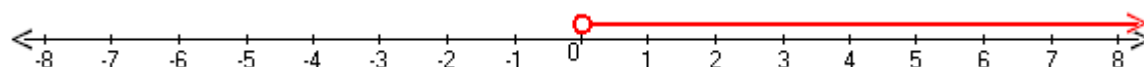
Inequality: $x \geq 1$



Inequality: $x < -6$



Inequality: $x \leq -1$



Inequality: $x > 0$