

Name : _____

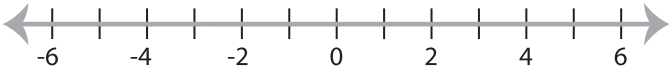
Score : _____

Graphing Inequalities

ES1

Graph the inequality :

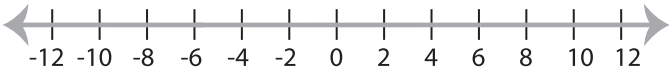
1) $x \geq -2$



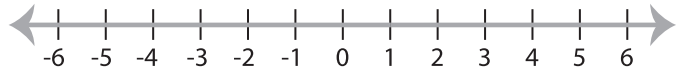
2) $x < 5$



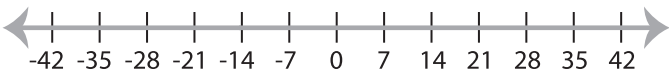
3) $x \leq 6$



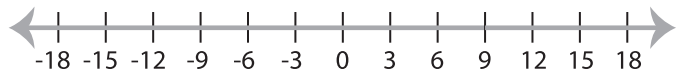
4) $x > 1$



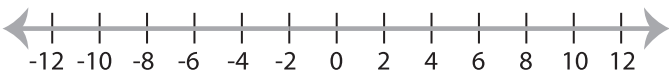
5) $x < -14$



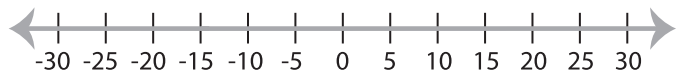
6) $x \leq 9$



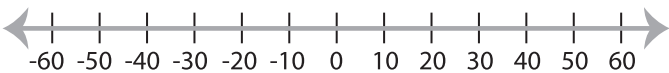
7) $x > -2$



8) $x \geq -15$



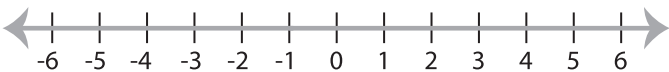
9) $x \leq -10$



10) $x > 16$



11) $x > -1$



12) $x \geq -3$

