

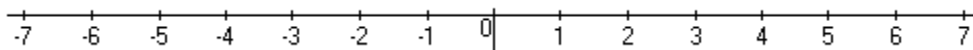
Student Name: _____

Score: _____

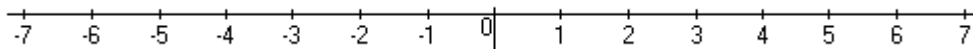
Solve and Graph

Work Space

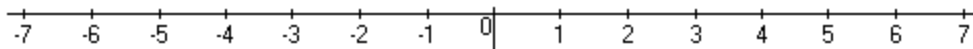
1) $x - 3 < -2$



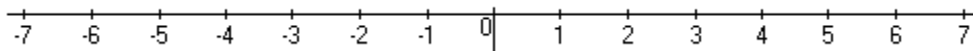
2) $\frac{x}{5} \geq -1$



3) $2 \leq x - 4$



4) $-7x > -28$



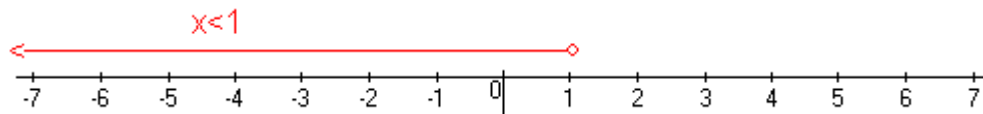
Student Name: _____

Score: _____

Answers

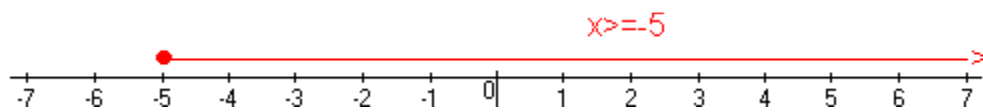
1) $x - 3 < -2$

Answer: $x < 1$



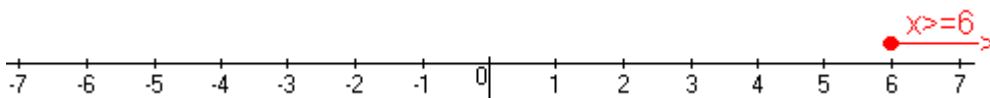
2) $\frac{x}{5} \geq -1$

Answer: $x \geq -5$



3) $2 \leq x - 4$

Answer: $x \geq 6$



4) $-7x > -28$

Answer: $x < 4$

