

Lines, Rays or Line segments: MCQ

Sheet 1

1) Which one of the following is a line segment?

- a)  b)  c)  d) 

2) Which one of the following is a line?

- a)  b)  c)  d) 

3) Which one of the following is a ray?

- a)  b)  c)  d) 





4) Which one of the following is a line segment?

- a)  b)  c)  d) 





5) Which one of the following is a ray?

- a)  b)  c)  d) 

6) Which one of the following is a line?

- a)  b)  c)  d) 

7) Which one of the following is a line segment?

- a)  b)  c)  d) 

Lines, Rays or Line segments: MCQ

Sheet 1

1) Which one of the following is a line segment?



2) Which one of the following is a line?



3) Which one of the following is a ray?



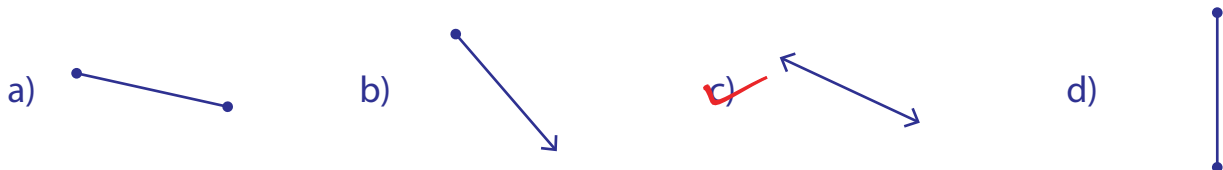
4) Which one of the following is a line segment?



5) Which one of the following is a ray?



6) Which one of the following is a line?



7) Which one of the following is a line segment?

